



Class 1 Maths

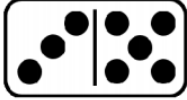

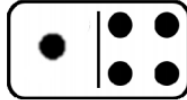

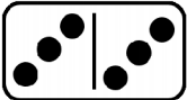
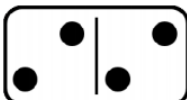

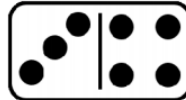
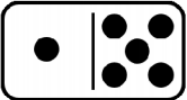

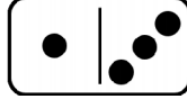
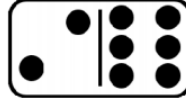
Wednesday 3rd February 2021


Learning activity: Please work through the attached power point with your children.

Extension activity: if you would like to challenge yourself, have a go at the attached activity. However, I am very proud of how hard you are working so you might like to do some groups spotting when you are out on your walk. How many birds on the telephone wire? How many in the tree? How many altogether? How many red cars are parked on the street? How many black cars? How many altogether? It is nice to get away from the screen and enjoy learning outdoors. Let me know how you get on!

 **#MathsEveryoneCan** 

How many spots do the dominoes have on each side?
How many do they have altogether?





Use the dominoes to fill the track.
Touching ends must match.

•	•••	•••	••••
---	-----	-----	------

Can you make a complete circuit?